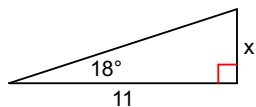


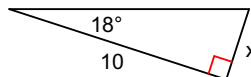
Online Tangent Practice

Find the missing side. Round to the nearest tenth.

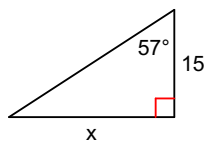
1)



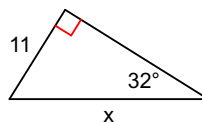
2)



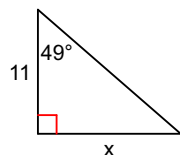
3)



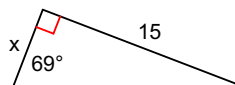
4)



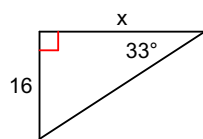
5)



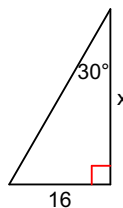
6)



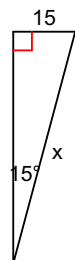
7)



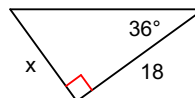
8)



9)



10)



Online Tangent Practice

Find the missing side. Round to the nearest tenth.

