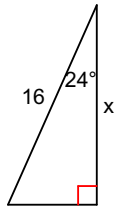


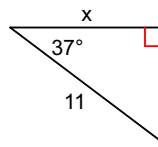
Online cosine Practice

Find the missing side. Round to the nearest tenth.

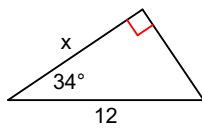
1)



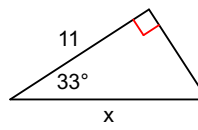
2)



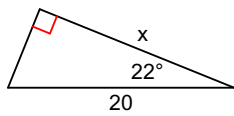
3)



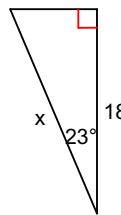
4)



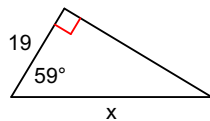
5)



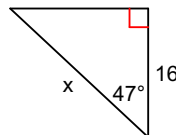
6)



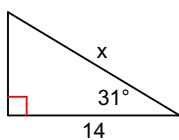
7)



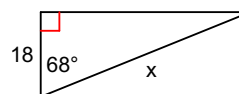
8)



9)



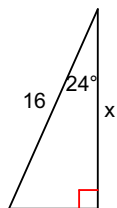
10)



Online cosine Practice

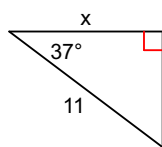
Find the missing side. Round to the nearest tenth.

1)



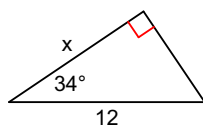
14.6

2)



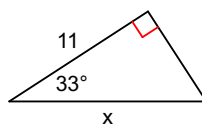
8.8

3)



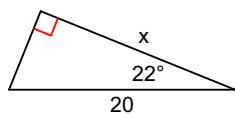
9.9

4)



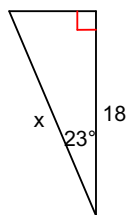
13.1

5)



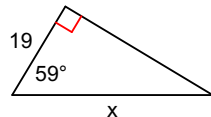
18.5

6)



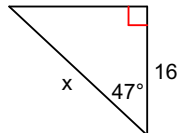
19.6

7)



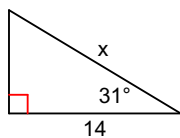
36.9

8)



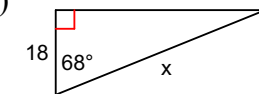
23.5

9)



16.3

10)



48.1